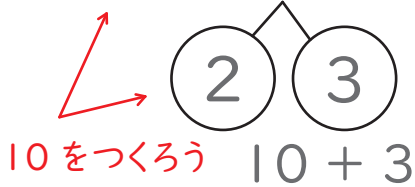



こたえが 20までの たしざんに こたえましょう。

1 くりあがりのある たしざんを といてみましょう。


(1) $8 + 5 = \square$




(2) $9 + 6 = \square$




(3) $7 + 7 = \square$




(4) $6 + 9 = \square$



(5) $5 + 8 = \square$



(6) $4 + 7 = \square$



2 たしざんの もんだいを ときましょう。

(1) $12 + 3 = \square$

(2) $8 + 4 = \square$

(3) $4 + 9 = \square$

(4) $13 + 7 = \square$

