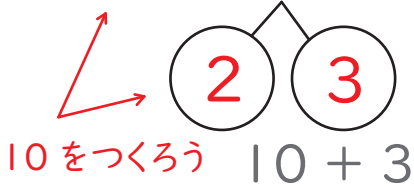



こたえが20までのたしざんにこたえましょう。

1 くりあがりのあるたしざんをといてみましょう。


$$(1) 8 + 5 = \boxed{13}$$



$$(2) 9 + 6 = \boxed{15}$$




$$(3) 7 + 7 = \boxed{14}$$




$$(4) 6 + 9 = \boxed{15}$$



$$(5) 5 + 8 = \boxed{13}$$



$$(6) 4 + 7 = \boxed{11}$$



2 たしざんのもんだいをときましょう。

$$(1) 12 + 3 = \boxed{15}$$

$$(2) 8 + 4 = \boxed{12}$$

$$(3) 4 + 9 = \boxed{13}$$

$$(4) 13 + 7 = \boxed{20}$$

